

MS115 Mathematics for Enterprise Computing

First in-class test - Answer ALL questions

Name	Student Id

1. In each part of this question, circle the number of **one** correct answer.

Marking scheme for Question 1: +3 for each correct answer; -1 for each incorrect answer; 0 marks for no answer or an unclear answer.

(a) Two sets A and B are equal when

- (i) $A \cap B \subseteq A$;
- (ii) $A \subseteq B$ and $B \subseteq A$;
- (iii) $A \cap B = \emptyset$;
- (iv) $A \cap B \neq \emptyset$.

(b) Sets A , B and C are pairwise disjoint if

- (i) $A \cap B = C$;
- (ii) $A \cap B \cap C = \emptyset$;
- (iii) $A \cap B \cap C = (A \cap B) \cap C$;
- (iv) $A \cap B = \emptyset$, $B \cap C = \emptyset$ and $A \cap C = \emptyset$.

(c) A *function* from a set A to a set B is a relation on A and B that

- (i) relates some element of A to some element of B ;
- (ii) relates exactly one element of A to some element of B ;
- (iii) relates each element of A to exactly one element of B ;
- (iv) relates every element of A to more than one element of B .

(d) A *function* from a set A to a set B is invertible if

- (i) $|A| \geq |B|$;
- (ii) no element of A is related to more than one element of B ;
- (iii) every element of B is the image of exactly one element of A ;
- (iv) every element of B is the image of at least one element of A .

(e) The relation \leq on the set of integers \mathbb{Z} is

- (i) reflexive, symmetric and transitive;
- (ii) reflexive and symmetric, but not transitive;
- (iii) reflexive and transitive, but not symmetric;
- (iv) symmetric and transitive, but not reflexive.

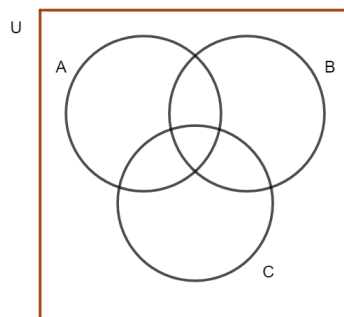
2. Compute the truth table of the following compound proposition:

$$(P \Rightarrow Q) \vee (P \vee Q).$$

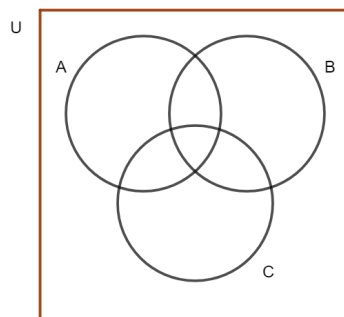
[10 marks]

3. In each case, shade the relevant region of the given Venn diagram:

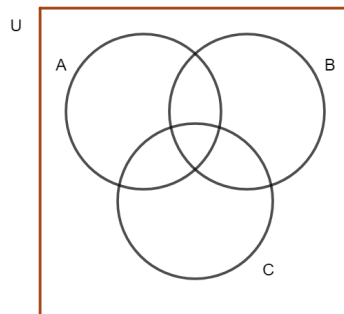
(i) $(A \cap B) \cup C$



(ii) $(A \cap B) \cap \bar{C}$



(iii) $(\bar{A} \cap \bar{B}) \cap C$



[6 marks]

4. Consider two sets A and B within a universal set U . Determine the number of elements in $A \cap B$ given the following set cardinalities:

$$|U| = 80, \quad |\overline{A}| = 50, \quad |\overline{B}| = 40, \quad |(\overline{A \cup B})| = 30.$$

(You may find it helpful to sketch a Venn diagram) [6 marks]

5. For $A = \{1, 2, 3, 4, 5, 6, 7, 8, 9, 10\}$, consider the equivalence relation R on A defined as follows:

$$xRy \text{ exactly when } y - x = 3k \text{ for some } k \in \mathbb{Z}.$$

Write down the distinct equivalence classes that form a partition of A .

(Note: For $x \in A$, the equivalence class of x is the set $E_x = \{y \in A \mid yRx\}$).

[7 marks]

6. Consider the function

$$f(x) = \frac{x + 1}{2x - 2}$$

(i) Let its domain be the largest possible subset of \mathbb{R} . Describe this set.

(ii) Show that $\frac{1}{2}$ is not an element of the range of f .

[6 marks]